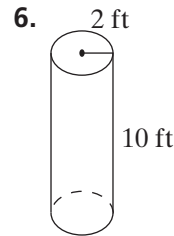
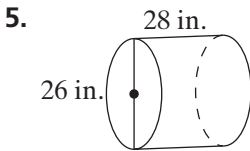
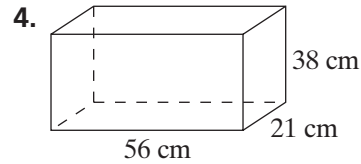
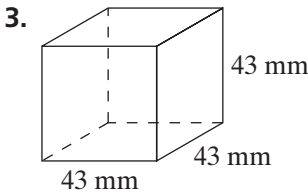
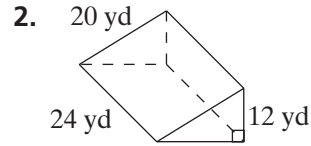
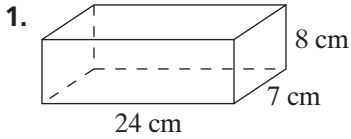


Practice 9-2

Volumes of Prisms and Cylinders

Find the volume of each solid to the nearest whole number.



7. Suppose you want to buy concrete for a 36 ft by 24 ft by 9 in. patio. If concrete costs \$55/yd³, how much will the concrete for the patio cost?

8. A cylinder has a volume of about 500 cm³ and a height of 10 cm. What is the length of the radius to the nearest tenth of a cm?

All rights reserved.

© Pearson Education, Inc., publishing as Pearson Prentice Hall.