


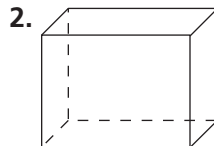
# Practice 8-3

## Three-Dimensional Figures and Spatial Reasoning

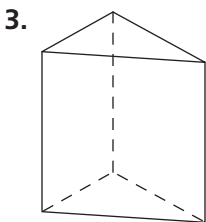
Name each three-dimensional figure.



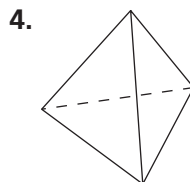
\_\_\_\_\_



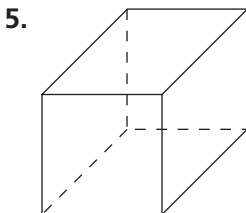
\_\_\_\_\_



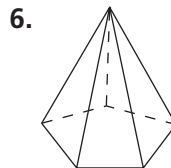
\_\_\_\_\_



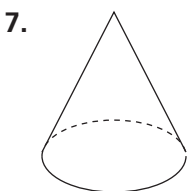
\_\_\_\_\_



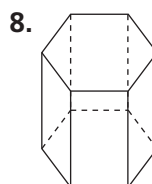
\_\_\_\_\_



\_\_\_\_\_



\_\_\_\_\_



\_\_\_\_\_

9. In a square pyramid, what shape are the faces?

\_\_\_\_\_

10. How many faces does a rectangular prism have? How many edges? How many vertices?

\_\_\_\_\_