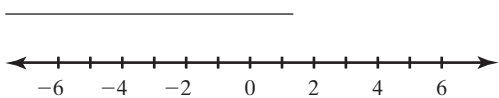


Practice 3-3

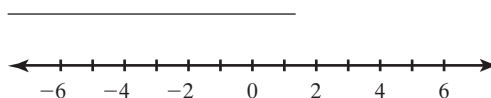
Solving Inequalities by Multiplying or Dividing

Solve each inequality. Graph each solution.

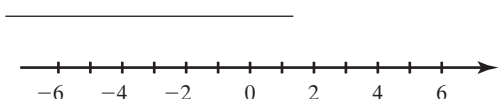
1. $6w \leq 36$




2. $10a \geq 40$



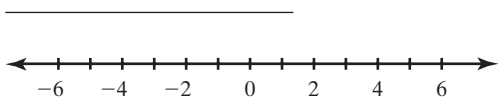
3. $\frac{f}{3} \leq -2$



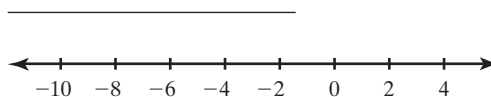
4. $\frac{v}{4} > 2$



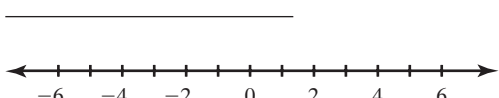
5. $7a > -28$




6. $-\frac{c}{3} \geq 3$



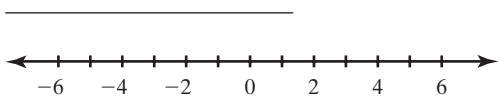
7. $\frac{f}{2} > -1$



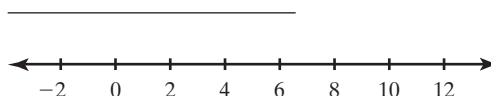
8. $9a \leq 63$



9. $4w \geq -12$



10. $-\frac{h}{2} \geq -5$



Write an inequality to solve each problem. Then solve the inequality.

11. Marcus wants to buy 5 baseballs. He has \$35. What is the most each baseball can cost?

12. Melinda charges \$4 per hour for babysitting. Mrs. Garden does not want to spend more than \$25 for babysitting. What is the maximum number of hours that she can have Melinda babysit?

All rights reserved.

© Pearson Education, Inc., publishing as Pearson Prentice Hall.