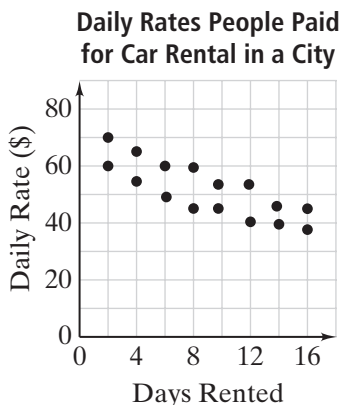


# Practice 10-1

## Scatter Plots

Use the given scatter plots to complete Exercises 1 and 2.

1. What does the point (12, 40) represent?

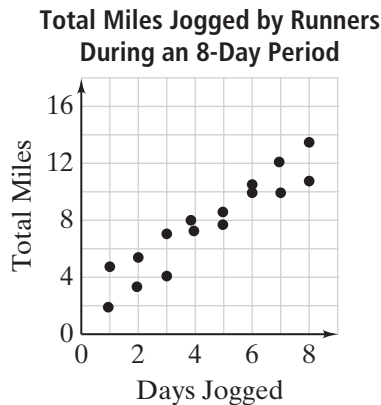



---



---

2. What does the point (7, 10) represent?




---

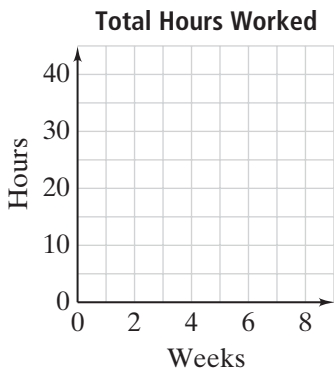


---

Make a scatter plot for each set of data.

3.

<b>Weeks</b>	7	4	6	8	2	3
<b>Hours</b>	28	20	25	36	10	12



4.

<b>Work Hours</b>	20	15	10	35	30	25
<b>Total Sales</b>	60	30	15	90	80	75

