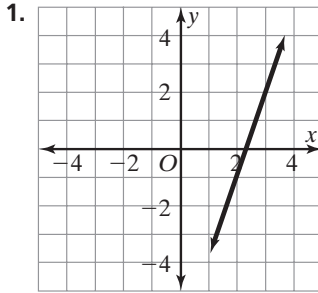


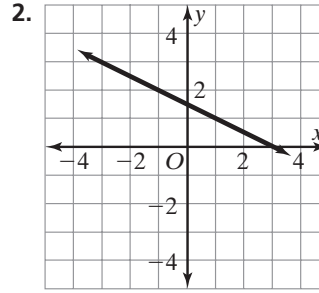
## Practice 4-1

## Understanding Slope

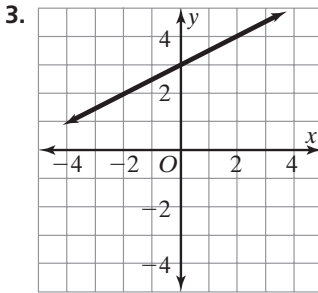
Find the slope of each line.



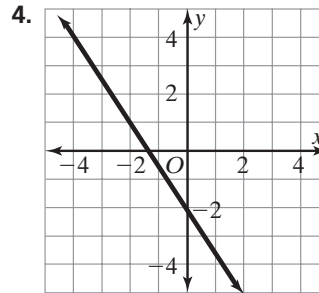
\_\_\_\_\_



\_\_\_\_\_



\_\_\_\_\_



\_\_\_\_\_

The points from each table lie on a line.  
Use the table to find the slope of each line.  
Then graph the line.

5. 

<b>x</b>	0	1	2	3	4
<b>y</b>	-3	-1	1	3	5

slope = \_\_\_\_\_

6. 

<b>x</b>	0	1	2	3	4
<b>y</b>	5	3	1	-1	-3

slope = \_\_\_\_\_

